

Vypočítaj

$8 + 7 =$

$16 - 8 =$

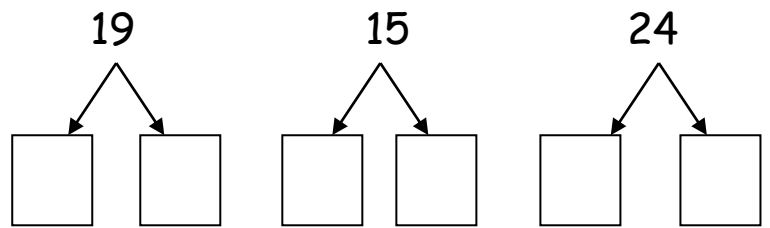
$12 + 5 =$

$25 - 10 =$

$14 + 8 =$

$17 - 4 =$

Rozlož na desiatky a jednotky



Rieš slovnú úlohu


Patrícia mala 30 centov. Za zošit zaplatila 15 centov. Koľko centov jej zostalo?

.....

Usporiadaj čísla od najmenšieho po najväčšie

12, 4, 29, 20, 13, 11, 5, 1, 18, 27

Spočítaj tvary



Vypočítaj

$6 + \square = 16$

$14 - \square = 12$

$\square + 5 = 11$


$\square - 3 = 17$

$8 + \square = 14$

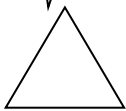
$20 - \square = 15$

Doplň

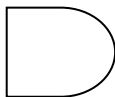
$9 + 4 =$



$\square + 7 =$




$\square - 2 =$



$\square - 8 =$



$\square - 6 =$



Oprav chyby

$3 + 7 + 2 = 11$

$0 + 18 - 4 = 13$

$5 + 5 + 10 = 19$

$30 - 10 - 5 = 15$

Porovnaj čísla a napíš o koľko je jedno väčšie ako druhé

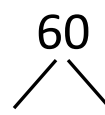
$29 \square 9 \text{ o } \dots\dots\dots$

$12 \square 12 \text{ o } \dots\dots\dots$

$10 \square 30 \text{ o } \dots\dots\dots$

Veľa šťastia!

7. Rozlož čísla na desiatky a jednotky:



.